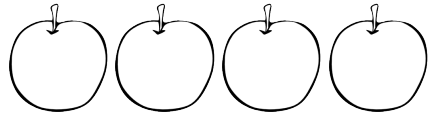
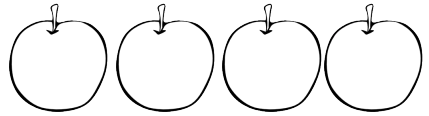


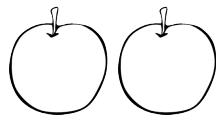
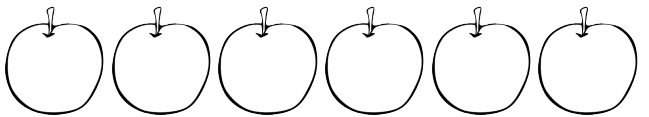




Name \_\_\_\_\_ Date \_\_\_\_\_

 +  = \_\_\_\_\_

 +  = \_\_\_\_\_

 +  = \_\_\_\_\_

 +  = \_\_\_\_\_

Annie went apple picking with her friend Alex. Annie picked 5 apples and Alex picked 4. Draw and label a picture to show how many apples each person picked.

- Write a number sentence to show how many apples Annie and Alex picked altogether.
- Write a number sentence to show how many more apples Annie picked than Alex.